


Name: _____ Class: _____

Solid - Liquid - Gas

Are the following solid, liquid or gas ?

1.


Lake water



Solid Liquid Gas

2.

Clouds



Solid Liquid Gas

3.

Iceburg



Solid Liquid Gas

4.


Jug



Solid Liquid Gas

5.

Soap



Solid Liquid Gas